


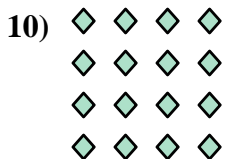
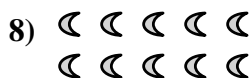

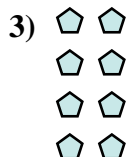
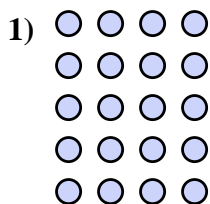
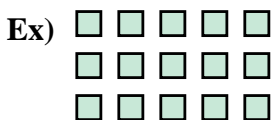




Write each array as an addition problem and solve.



Answers

Ex. $5+5+5=15$

1. _____

2. _____

3. _____

4. _____

5. _____

6. _____

7. _____

8. _____

9. _____

10. _____

11. _____







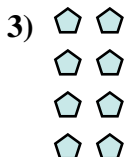
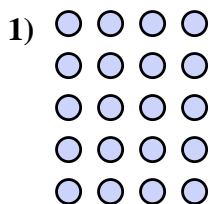
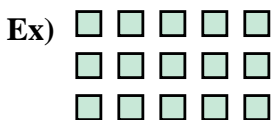
12. _____

13. _____

14. _____



Write each array as an addition problem and solve.



Answers

Ex. $5+5+5=15$

1. $4+4+4+4+4=20$

2. $5+5+5+5+5=25$

3. $2+2+2+2=8$

4. $3+3=6$

5. $3+3+3+3=12$

6. $3+3+3+3+3=15$

7. $4+4=8$

8. $5+5=10$

9. $2+2=4$

10. $4+4+4+4=16$

11. $3+3+3=9$

12. $4+4+4=12$

13. $5+5+5+5=20$

14. $2+2+2+2+2=10$