

Name \_\_\_\_\_

Date \_\_\_\_\_

## Multiplication Practice


Write a number sentence for each array.

1



\_\_\_\_\_

2




\_\_\_\_\_

3



\_\_\_\_\_

4




\_\_\_\_\_

5



\_\_\_\_\_

6




\_\_\_\_\_

7




\_\_\_\_\_

8




\_\_\_\_\_

9




\_\_\_\_\_

10




\_\_\_\_\_

11



\_\_\_\_\_

12



\_\_\_\_\_